


Name _____


Count the Quarters

How many quarters are there? Write your answer in the space provided.


1.  _____ quarters.

2.  _____ quarters.

3.  _____ quarters.

4.  _____ quarters.

5.  _____ quarters.

6.  _____ quarters.

7.  _____ quarters.